



# Solar Cell Investigation

The following procedure enables you to:

- Measure the **maximum power**  $P_{\max}$  that a photovoltaic (PV) cell can deliver to a resistive load under given conditions of illumination.
- Calculate the **maximum cell efficiency**  $\eta_{\max}$  and the **load resistance**  $R_{L\max}$  for **maximum power output**.
- Measure **short-circuit current**  $I_{sc}$ , **open-circuit voltage**  $V_{oc}$  and calculate the **fill factor** FF.
- See the variation of output power with time during the day as the sun moves across the sky and as the distance that the solar radiation has to travel through the atmosphere varies.

You will need:

- PV cell.
- Direct current voltmeter and milliammeter, or multimeter (internal resistance of voltmeter should be at least  $1000\Omega/V$  to permit measurement of open-circuit voltage).
- Assorted resistors in the range 1 to  $250\Omega$  to provide the resistive load and represent the device or system that you want power by solar electricity.
- Light source - preferably direct sunlight (or a bright lamp may be used).
- Connection wire.
- Light intensity meter - *not essential*

**Key formulae:**

$V = I \times R$       voltage (volts) = current (amps) x resistance (ohms)      **Ohm's Law**

$P = I \times V$       power (watts) = current x voltage


**Procedure:**

Connect the solar cell and meter as shown in fig.1 - at this stage leaving out a load resistor.

Illuminate the cell with your light source.

Record meter readings for open-circuit voltage  $V_{oc}$  and short-circuit current  $I_{sc}$ .

The values will depend on the area of the cell and the intensity of illumination.



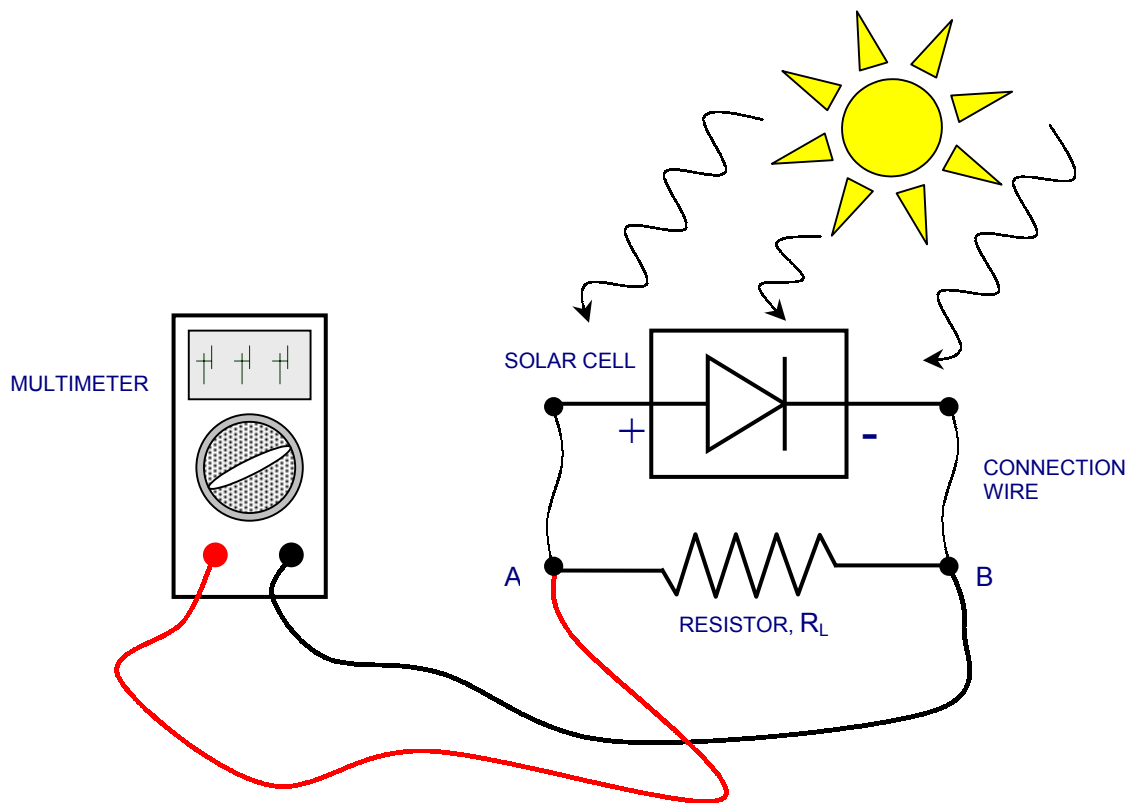


Fig.1 set-up for experiment

To find the cell output under various load conditions, connect different resistors  $R_L$  (1 to  $250\Omega$ ) as shown in fig.1.

For each value  $R_L$  record on the table below, voltage across the load (at points A-B), and current through the load (i.e. break the circuit and put the meter in series with  $R_L$ ).

You need a constant intensity of radiation for these measurements so keep the PV cell facing the same direction in relation to the light source.

Calculate the various power outputs  $P(R_L) = I(R_L) \times V(R_L)$  - each dependant on the value  $R_L$ .

	$R_L$	V	I	$P = I \times V$
1				
2				
3				
4				
5				
6				
7				
8				

Plot (as in figure 2 below) the pairs of values I and V you measure when the cell is delivering power to the load. Also plot the values of P against V

Draw a smooth curve through the points, and find the maximum power point  $P_{max}$  (where  $I \times V$  is at a maximum).

Note that with this method - following the current and voltage conventions in fig.2 - you will only obtain points in the fourth quadrant of the I-V characteristic. Often this quadrant is shown inverted for ease of representation.

The optimum load resistance for the cell  $R_{Lmax}$  (when it gives maximum power output  $P_{max}$ ) is given by:

$$R_{Lmax} = V_{max} / I_{max}$$

where  $V_{max}$  and  $I_{max}$  are the voltage and current associated with the maximum power point.

If you know the intensity of illumination at the cell (measured in Watts per square metre) and the surface area of the cell (in  $m^2$ ), then you can calculate the total input power to the PV cell.

Measure illumination at the cell with a light intensity meter if you have one.

The maximum cell efficiency  $\eta_{max}$  is the ratio of maximum power produced to total input power:

$$\eta_{max} = P_{max} / \text{total input power}$$

If you do not have a light-intensity meter then estimate cell efficiency (or radiant energy to electrical energy conversion factor)  $\eta_{max}$  to be between 0.10 (10%) and 0.14 (14%). Then use the equation above for a simple estimate of the Sun's intensity.

The power the cell could provide if it had a "square-shaped" I-V characteristic (which it won't have), is given by multiplying  $V_{oc}$  by  $I_{sc}$ .

Calculate the fill factor:

$$FF = P_{max} / I_{sc} V_{oc}$$

a measure of how "square" the I-V characteristic is.

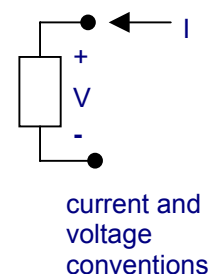
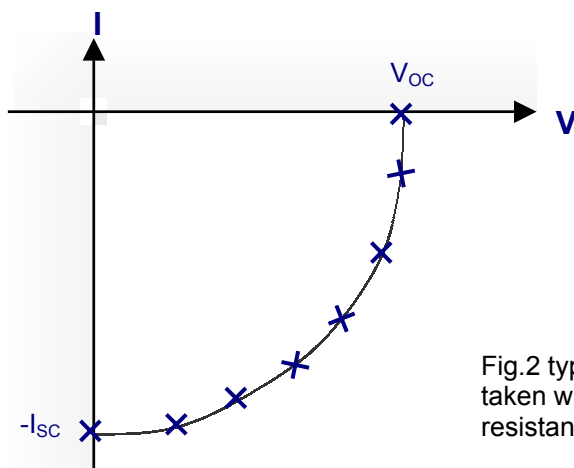



Fig.2 typical plot of I verses V taken with different load resistances  $R_L$  connected to cell.

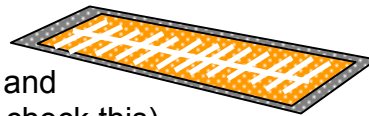
To compensate for fluctuations in solar radiation intensity (therefore the total input power), some PV systems include an electronic maximum power point tracking circuit. This automatically varies the load "seen" by the PV cell so that it always operates around the maximum power point and delivers maximum power to the load.

In space solar radiation has a power density of approximately  $1365 \text{ W/m}^2$ .

At the earth's surface the atmosphere attenuates solar radiation, more so as the distance that it travels through the atmosphere increases.



In a further experiment you could measure short-circuit current,  $I_{sc}$  each hour through the day with the cell illuminated by sunlight and orientated horizontally, (use a spirit level to check this).



Plot and interpret the results, considering that to the first order,  $I_{sc}$  is proportional to intensity of illumination and that the intensity reaching the cell decreases as the sun goes lower in the sky and as the angle of incidence on the cell increases.

A PV cell mounted on a tracking device that followed the sun across the sky would receive greater illumination throughout the day as the cell is always facing the sun.

However, nothing can be done on the earth's surface to account for the 'thicker' atmosphere lower in the sky.

---

## Notes:

Maximum power  $P_{max}$  is represented by the area of the largest rectangle that can be fitted inside the curve of the IV characteristic, i.e where  $I \times V$  is at a maximum.